

FOR OFFICIAL USE

--	--	--	--	--	--

X100/101



* X 1 0 0 1 0 0 1 1 *

Total
Mark

--

NATIONAL
QUALIFICATIONS
2011

WEDNESDAY, 18 MAY
1.00 PM – 1.35 PM

MATHEMATICS
INTERMEDIATE 1
Units 1, 2 and 3
Paper 1
(Non-calculator)

Fill in these boxes and read what is printed below.

Full name of centre

--

Town

--

Forename(s)

--

Surname

--

Date of birth

Day Month Year

--	--	--	--	--	--

Scottish candidate number

--	--	--	--	--	--	--	--	--	--

Number of seat

--

- 1 You may **NOT** use a calculator.
- 2 Write your working and answers in the spaces provided. Additional space is provided at the end of this question-answer book for use if required. If you use this space, write clearly the number of the question involved.
- 3 Full credit will be given only where the solution contains appropriate working.
- 4 Before leaving the examination room you must give this book to the Invigilator. If you do not you may lose all the marks for this paper.

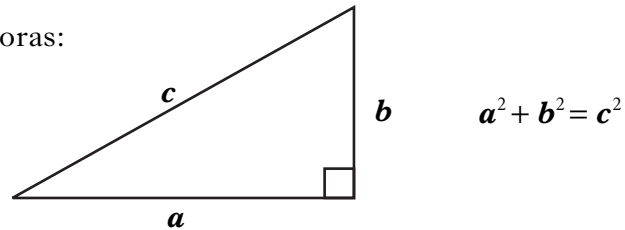
Use blue or black ink. Pencil may be used for graphs and diagrams only.



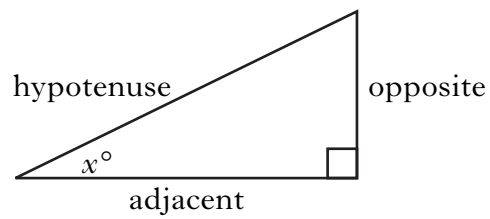
FORMULAE LIST

Circumference of a circle: $C = \pi d$
Area of a circle: $A = \pi r^2$

Theorem of Pythagoras:



Trigonometric ratios
in a right angled
triangle:



$$\tan x^\circ = \frac{\text{opposite}}{\text{adjacent}}$$

$$\sin x^\circ = \frac{\text{opposite}}{\text{hypotenuse}}$$

$$\cos x^\circ = \frac{\text{adjacent}}{\text{hypotenuse}}$$

Marks

ALL questions should be attempted.

1. (a) Find $6.47 + 13.9$.

1

(b) Find $\frac{5}{8}$ of 360.

1

(c) Find 12×13 .

1

[Turn over

Marks

2. An overnight ferry left Lerwick at 1745 and arrived in Aberdeen at 0720 the next morning.
How long did the journey from Lerwick to Aberdeen take?

1

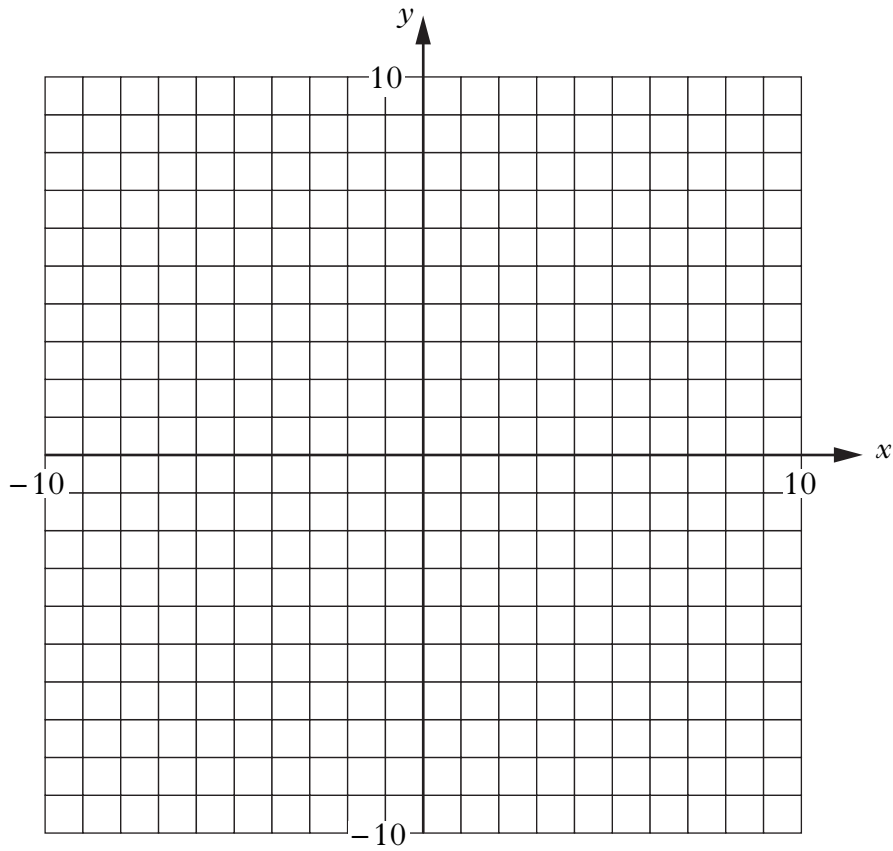
3. Work out the answer to

$$17 - 4 \times (-2).$$

2

Marks

4. (a) On the grid below, plot the points $P(-7,2)$ and $Q(5,-6)$.



- (b) Draw a line joining P to Q.
The point R is halfway along this line.
Write down the coordinates of R.

1

1

[Turn over

Marks

5. The fare charged by a taxi firm is:

£3 for the first 500 metres of a journey
plus 50p for **each additional** 500 metres.

(a) Find the fare charged for a journey of 1500 metres.

2

(b) The fare charged for another journey is £7.
What distance is the journey?

2

Marks

6. Solve algebraically the equation

$$7p - 2 = 54 + 3p.$$

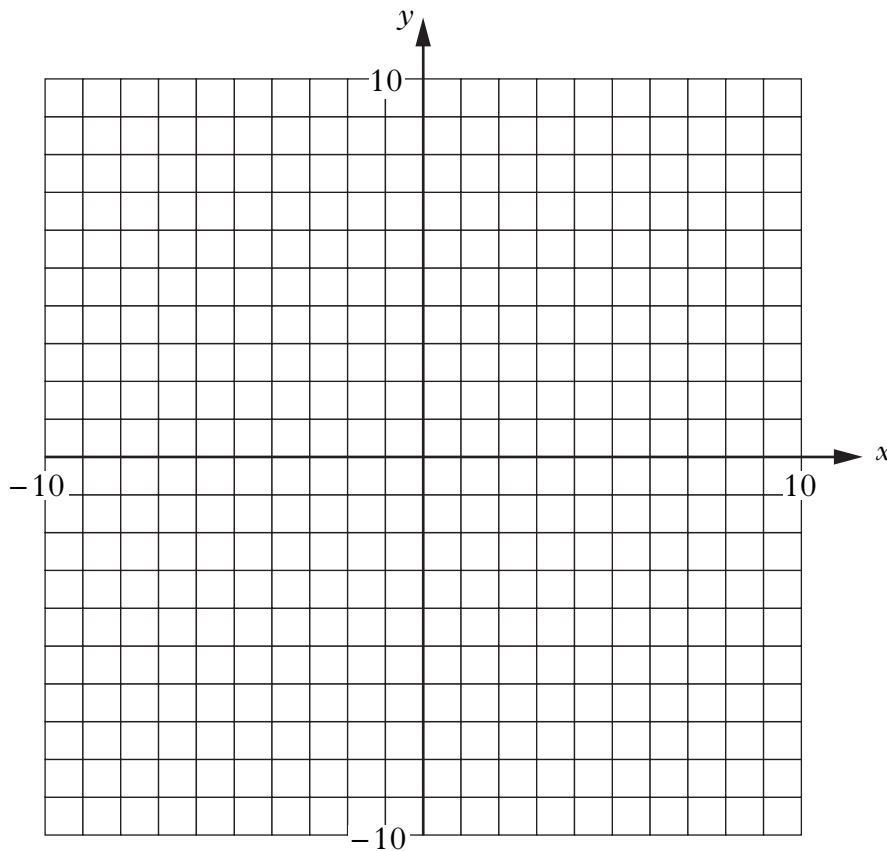
3

7. (a) Complete the table below for $y = 3x - 2$.

x	-2	0	3
y			

2

(b) Draw the line $y = 3x - 2$ on the grid.



2

[Turn over

Marks

8. Thirty students were given homework.

The frequency table shows the length of time each student spent on the homework.

Time (minutes)	Frequency
5	1
10	6
15	11
20	7
25	5
	Total = 30

- (a) Write down the modal time spent on the homework.

1

- (b) What is the probability that a student, picked at random, spent 20 minutes on the homework?

1

- (c) Complete the table below **and** find the mean time spent on the homework.

Time (minutes)	Frequency	Time \times Frequency
5	1	5
10	6	60
15	11	165
20	7	
25	5	
	Total = 30	Total =

3

Marks

9. Margaret has £200 worth of gift vouchers for a jewellery shop. She wants to buy some of the items shown below.

Bracelet	Pendant	Earrings	Bangle	Charm
£105	£80	£55	£50	£30

Margaret wants to buy **three** items.

She can spend a **maximum** of £200.

She does not want to buy more than one of each item.

One combination of **three** items that Margaret can buy is shown in the table below.

Bracelet £105	Pendant £80	Earrings £55	Bangle £50	Charm £30	Total Value (£)
	✓	✓	✓		185

Complete the table to show **all** the possible combinations of items that Margaret can buy.

3

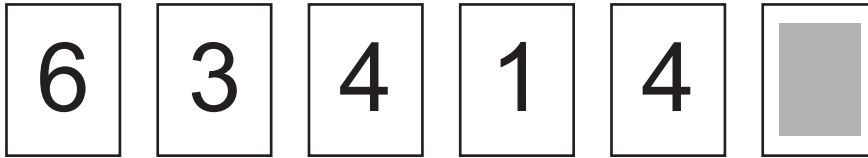
[Turn over for Question 10 on Page ten

Marks

10. Each card in a pile has a number printed on it.

(a) Seonaid selects these six cards from the pile.

The number on the last card is hidden.



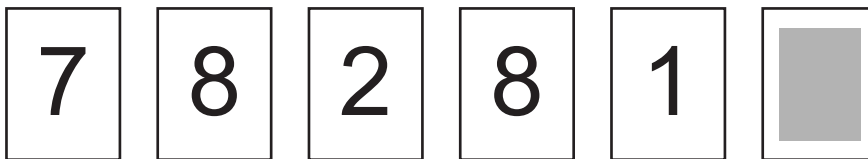
The range of the numbers on the **six** cards is 8.

Find the hidden number.

1

(b) Kirsty selects these six cards from the pile.

The number on the last card is hidden.



The mean of the numbers on the **six** cards is 5.

Find the hidden number.

2

[END OF QUESTION PAPER]

ADDITIONAL SPACE FOR ANSWERS

--



DO NOT
WRITE IN
THIS
MARGIN

ADDITIONAL SPACE FOR ANSWERS

--



FOR OFFICIAL USE

--	--	--	--	--	--

X100/103



* X 1 0 0 1 0 0 2 1 *

Total
Mark

--

NATIONAL
QUALIFICATIONS
2011

WEDNESDAY, 18 MAY
1.55 PM – 2.50 PM

MATHEMATICS
INTERMEDIATE 1
Units 1, 2 and 3
Paper 2

Fill in these boxes and read what is printed below.

Full name of centre

--

Town

--

Forename(s)

--

Surname

--

Date of birth

Day Month Year

--	--	--	--	--	--

Scottish candidate number

--	--	--	--	--	--	--	--	--	--

Number of seat

--

- 1 You may use a calculator.**
- 2 Write your working and answers in the spaces provided. Additional space is provided at the end of this question-answer book for use if required. If you use this space, write clearly the number of the question involved.
- 3 Full credit will be given only where the solution contains appropriate working.
- 4 Before leaving the examination room you must give this book to the Invigilator. If you do not you may lose all the marks for this paper.

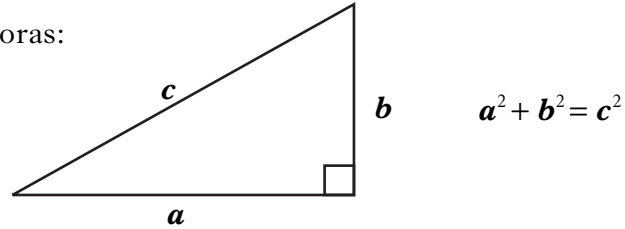
Use blue or black ink. Pencil may be used for graphs and diagrams only.



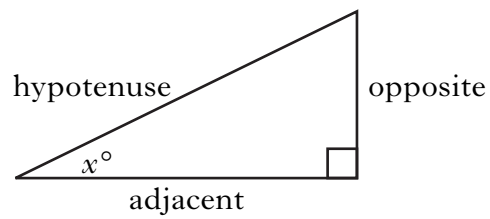
FORMULAE LIST

Circumference of a circle: $C = \pi d$
Area of a circle: $A = \pi r^2$

Theorem of Pythagoras:



Trigonometric ratios
in a right angled
triangle:



$$\tan x^\circ = \frac{\text{opposite}}{\text{adjacent}}$$

$$\sin x^\circ = \frac{\text{opposite}}{\text{hypotenuse}}$$

$$\cos x^\circ = \frac{\text{adjacent}}{\text{hypotenuse}}$$

Marks

ALL questions should be attempted.

1. Sohail burns off 160 calories when he runs for 20 minutes.
For how many minutes would he need to run to burn off 400 calories?

2

2. Solve algebraically the inequality

$$7c + 13 < 55.$$

2

[Turn over

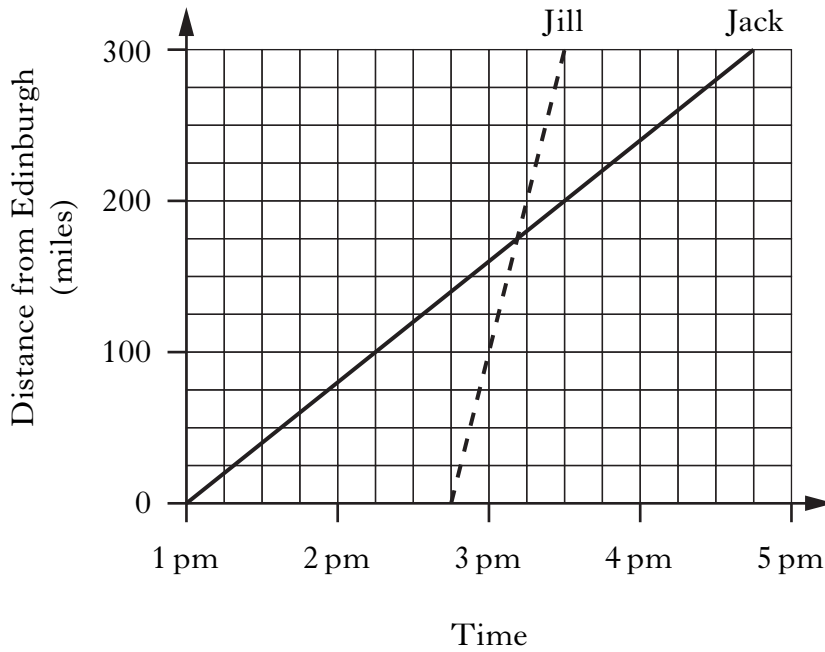
Marks

3. A factory produces 4000 widescreen televisions each valued at £950.
Calculate the total value of the 4000 televisions.
Give your answer in standard form.

3

Marks

4. Jack and Jill travel from Edinburgh to Birmingham.
Jack travels by train and Jill travels by aeroplane.
The graph below shows their journeys.



- (a) How much sooner than Jack does Jill arrive in Birmingham?

1

- (b) Calculate the average speed, in miles per hour, of Jack's journey.

3

[Turn over

Marks

5. (a) Multiply out the brackets and simplify

$$5(2m + 7) - m.$$

2

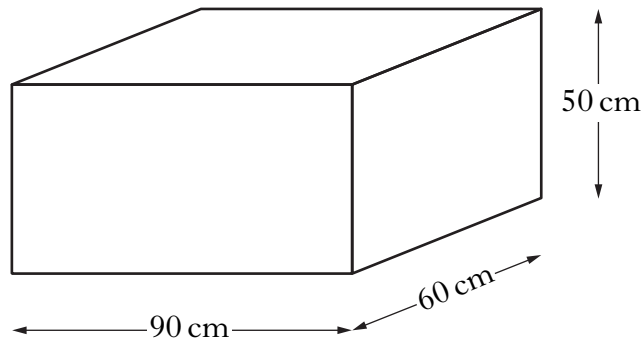
(b) Factorise

$$24 - 18k.$$

2

Marks

6. This empty tank is to be filled with water.



The tank is a cuboid, 90 centimetres long, 60 centimetres wide and 50 centimetres high.

The water fills at a rate of 15 litres every minute. (1 litre = 1000 cm³)

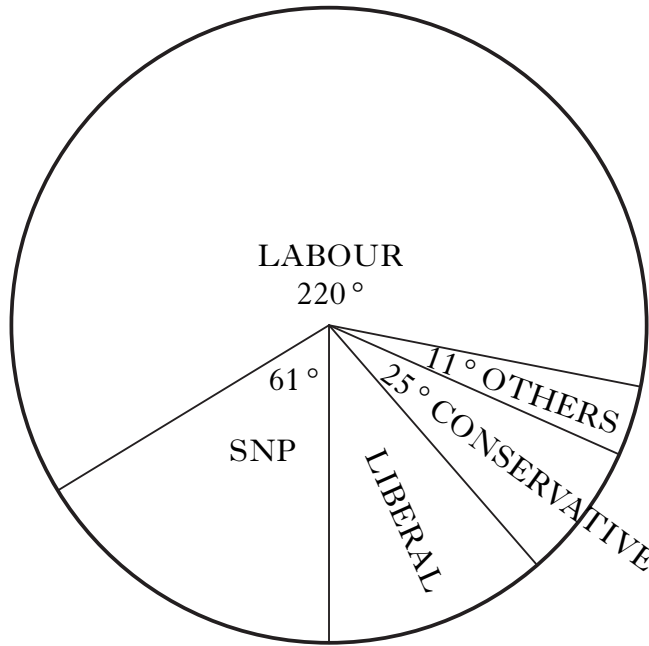
How long will it take to fill the tank?

4

[Turn over

7. The pie chart shows the share of the votes received by candidates in the Gleniston constituency at the general election in 2005.

Marks




- (a) A total of 30 960 people voted in the Gleniston constituency. How many people voted for the Liberal candidate?

3

Marks

7. (continued)

The pie chart below shows the share of the votes received by candidates in the Gleniston constituency at the by-election in 2008.



(b) Describe the **differences** in the share of the votes received by candidates in the by-election in 2008 and the general election in 2005.

2

[Turn over

Marks

8. Last year Mark rented a villa in Spain in April and October.
In April the villa cost him £800.
In October it cost the same number of **euros** as it did in April.
How much, in pounds and pence, did Mark pay in October?

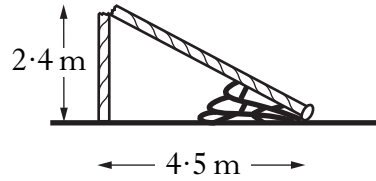
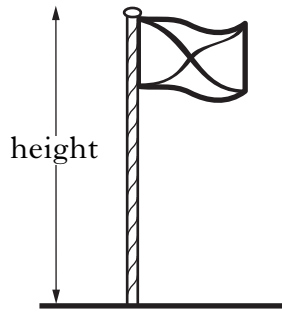
Exchange Rates

April £1 = €1.33
October £1 = €1.07

3

Marks

9. A flagpole snaps and falls over into the position shown.



Calculate the height of the flagpole before it fell over.

Do not use a scale drawing.

4

[Turn over

Marks

10. Joe borrows £1400 from a bank.
The rate of interest is 7.5% per annum.
Calculate the interest he must pay after four months.

3

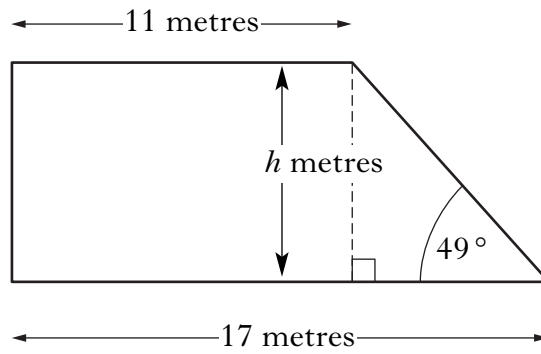
11. Use the formula below to find the value of P when $m = 360$ and $t = 0.45$.

$$P = \sqrt{\frac{m}{2t}}$$

3

Marks

12. Calculate the height, h metres, of the trapezium shown below.
Do not use a scale drawing.



4

[Turn over

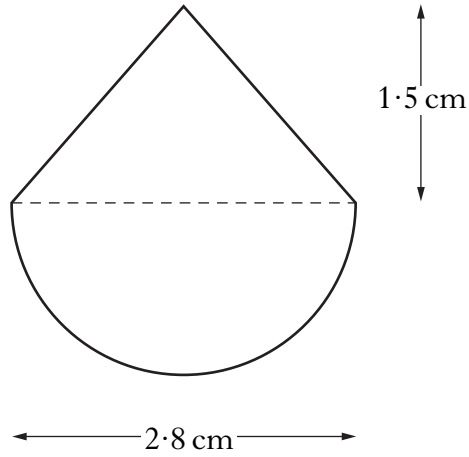
Marks

13. Alysoun bought a mobile phone for £125.
She sold it a few months later for £80.
Calculate her loss as a percentage of what she paid for the phone.

4

Marks

14. A badge showing a clown's head consists of a semi-circle and a triangle.



Calculate the area of the badge in square centimetres.

Give your answer correct to one decimal place.

5

[END OF QUESTION PAPER]



DO NOT
WRITE IN
THIS
MARGIN

ADDITIONAL SPACE FOR ANSWERS

--





DO NOT
WRITE IN
THIS
MARGIN

ADDITIONAL SPACE FOR ANSWERS

--



ADDITIONAL SPACE FOR ANSWERS

--

ADDITIONAL SPACE FOR ANSWERS

--

[BLANK PAGE]